



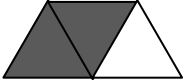



Name: _____

Date: _____

Class/Group: _____

A: Place Value, Add and Subtract		B: Multiply, Divide and Fractions		C: Measure and Geometry	
1. What is the missing number? 104 94 84 74 64 <input type="text"/>	2:1	11. $40 \div 10 =$	2:11	21. Tim has twenty five pence (25p). Tick the coins that will make this.	2:19
2. What is the value of the 5 in this number? 95	2:2	12. Which are the even numbers? 9 18 27 36	2:11		
3. Draw an arrow to label 7. 	2:3	13. What symbol is missing? $56 = 7 \square 8$	2:12	22. Sam has seventy five pence (75p). He buys a comic for twenty pence (20p). How much change does Sam get?	2:20
4. Use <, > or = to make this correct: $3 \times 5 \square 10 + 4$	2:4	14. What symbol is missing? $4 = 36 \square 9$	2:12		
5. Write this number in numerals. sixty eight	2:5	15. Tick (✓) if true: $7 \times 3 = 3 \times 7 \square$ $18 \div 6 = 6 \div 18 \square$	2:13	23. What time does this clock show?	2:22
6. There are 28 people on a train. 12 more get on. How many people now?	2:6	16. 4 boys share 32 chocolates. How many chocolates does each boy get?	2:14		
7. $20 - \square = 3$	2:7	17. 4 bags each contain 6 apples. How many apples are there in total?	2:14	24. The way pupils get to school is shown in this block diagram.	2:29
8. $92 - 10 =$	2:8	18. What fraction is shaded? 	2:15		
9. Is this true? Write 'yes' or 'no'. $23 + 9 = 9 + 23$	2:9	19. How many thirds are in 1 whole?	2:15	Walk Bike Bus	
10. Use $48 = 22 + 26$ to help find: $48 - 22 = \square$	2:10	20. How many halves make 2 whole ones?	2:16	3 pupils travel by bus. Show this on the diagram.	2:30
25. How many pupils were asked in total?					
Total (A)		Total (B)		Total (C)	
Test Total (A+B+C)		R (0-9)	Y (10-19)		G (20-25)